



Winter Break

Money	Operations	Unit Review
<p>Rachel has the money below.</p>  <p>If she spends 78 cents, how much money does she have left?</p>	<p>Which sentence is true?</p> <p>A. 100 is a group of five tens B. 100 is a group of ten fives C. 100 is a group of ten tens D. 100 is a group of ten ones</p>	<p>Put the numbers in order from greatest to least.</p> <p style="text-align: center;">281, 121, 412, 321</p> <p style="text-align: center;">_____, _____, _____, _____</p>
Operations	Unit Review	Word Problems
<p>Plot the number 19 on the number line.</p> 	<p>Which number has five ones, eight tens, and nine hundreds?</p> <p>A. 589 B. 598 C. 895 D. 985</p>	<p>Rachel bought two coloring books. One had twenty-three pictures and the other had thirty-two. After one week she had already colored forty-four of the pictures. How many pictures does she still have to color?</p>

Number Story

Name: _____

Tricia's mother let her play outside for 15 minutes. When she went outside, she played with her dog for 5 minutes. Then she rode her bike for 4 minutes. She spent the rest of the time catching bugs. How many minutes did Tricia spend catching bugs?

Strategy 1



Strategy 2

Equation: _____

Answer: _____

Explain:

Winter Break

Money	Operations	Unit Review
<p>If Sonja has the money below, how much more does she need to make \$1.00?</p> 	<p>Ethan and Carl had some base ten blocks. Ethan said, "I can make 123 using 1 hundred, 2 tens, and 3 ones." Carl said, "I can make 136 using 123 ones." Who is correct?</p> <p>A. Ethan B. Carl C. Both Ethan and Carl</p>	<p>What is another way to write one hundred twelve?</p> <p>A. $100 + 10 + 2$ B. $100 + 11 + 2$ C. $100 + 20 + 1$ D. $200 + 10 + 1$</p>
Operations	Unit Review	Word Problems
<p>Plot the number 20 on the number line.</p> 	<p>Choose the number sentences that are true. Select all that apply.</p> <p>A. $336 < 346$ B. $478 > 487$ C. $654 > 649$ D. $901 < 899$</p>	<p>Ned had to wash nine short sleeve shirts and twenty-one long sleeve shirts before school. If he had only washed twenty-nine of them by the time school started, how many did he not wash?</p>

Number Story

Name: _____

The bakers at the Beverly Hills Bakery baked 200 loaves of bread on Monday morning. They sold 93 loaves in the morning and 39 loaves in the afternoon. How many loaves of bread did they have left?

Strategy 1



Strategy 2

Equation: _____

Answer: _____

Explain:

Winter Break

Money	Operations	Unit Review
<p>If Missy has the coins below, how much more does she need to have 54 cents?</p> 	<p>Which sentence is true?</p> <p>A. 10 is a group of five tens B. 10 is a group of ten ones C. 10 is a group of ten tens D. 10 is a group of ten hundreds</p>	<p>Cindy and Joel had some base ten blocks. Cindy said, "I can make 153 using 1 hundred, 5 tens, and 3 ones." Joel said, "I can make 153 using 153 tens." Who is correct?</p> <p>A. Cindy B. Joel C. Both Cindy and Joel</p>
Operations	Operations	Word Problems
<p>Plot the number 40 on the number line.</p> 	<p>What is another way to write 128?</p> <p>A. $100 + 20 + 9$ B. $100 + 21 + 8$ C. $100 + 200 + 8$ D. $100 + 20 + 8$</p>	<p>Cynia collected 40 flowers to give to her family members. She gave away 21, but then picked 5 more flowers. How many flowers does Cynia have now?</p>